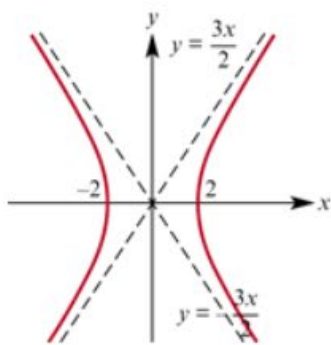
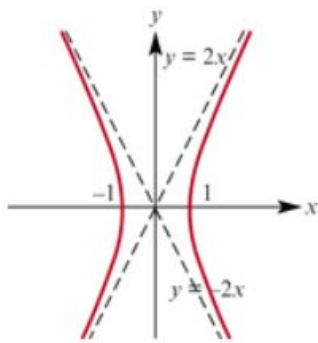


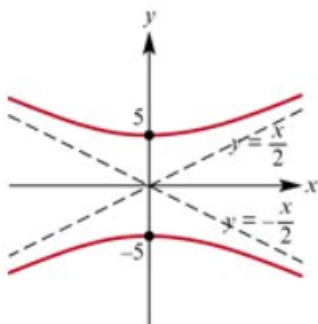
1 a



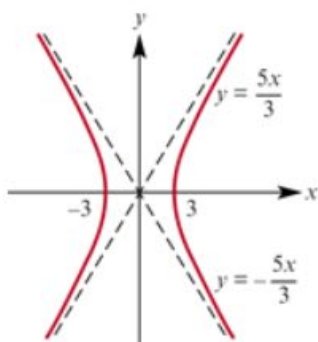
b



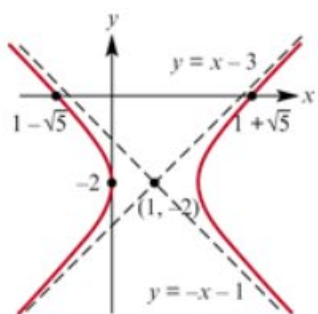
c

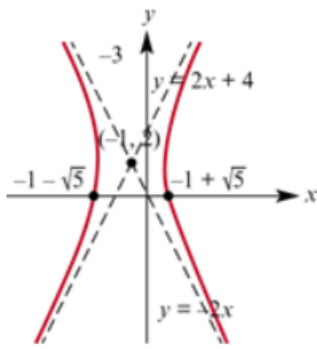
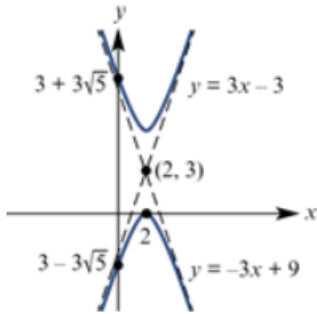
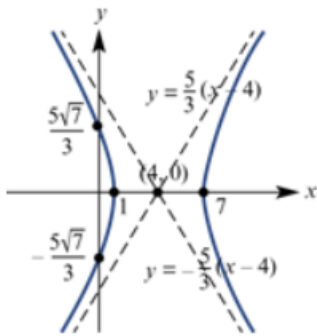


d



2 a



b**c****d**

e For this question, we must first complete the square in both x and y variables. This gives,

$$x^2 - 4y^2 - 4x - 8y - 16 = 0$$

$$(x^2 - 4x) - 4(y^2 + 2y) - 16 = 0$$

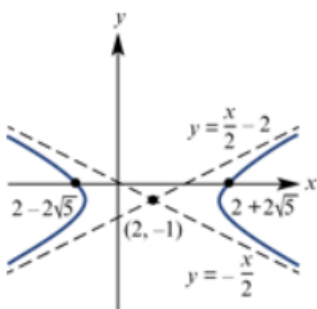
$$(x^2 - 4x + 4 - 4) - 4(y^2 + 2y + 1 - 1) - 16 = 0$$

$$((x - 2)^2 - 4) - 4((y + 1)^2 - 1) - 16 = 0$$

$$(x - 2)^2 - 4 - 4(y + 1)^2 + 4 - 16 = 0$$

$$(x - 2)^2 - 4(y + 1)^2 = 16$$

$$\frac{(x - 2)^2}{16} - \frac{(y + 1)^2}{4} = 1$$



f For this question, we must first complete the square in both x and y variables. This gives,

$$9x^2 - 25y^2 - 90x + 150y = 225$$

$$9(x^2 - 10x) - 25(y^2 - 6y) = 225$$

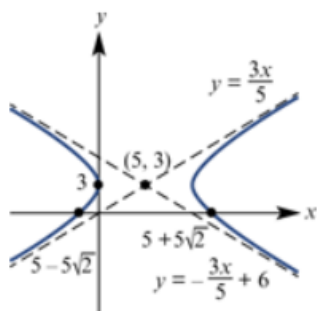
$$9(x^2 - 10x + 25 - 25) - 25(y^2 - 6y + 9 - 9) = 225$$

$$9((x - 5)^2 - 25) - 25((y - 3)^2 - 9) = 225$$

$$9(x - 5)^2 - 225 - 25(y - 3)^2 + 225 = 225$$

$$9(x - 5)^2 - 25(y - 3)^2 = 225$$

$$\frac{(x - 5)^2}{25} - \frac{(y - 3)^2}{9} = 1$$



3 Let (x, y) be the coordinates of point P . If $AP - BP = 6$, then

$$\sqrt{(x - 4)^2 + y^2} - \sqrt{(x + 4)^2 + y^2} = 3$$

$$\sqrt{(x - 4)^2 + y^2} = 6 + \sqrt{(x + 4)^2 + y^2}.$$

Squaring both sides gives

$$(x - 4)^2 + y^2 = 36 + 12\sqrt{(x + 4)^2 + y^2} + (x + 4)^2 + y^2$$

Expanding and simplifying

$$x^2 - 8x + 16 + y^2 = 36 + 12\sqrt{(x + 4)^2 + y^2} + x^2 + 8x + 16 + y^2$$

$$-16x - 36 = 12\sqrt{(x + 4)^2 + y^2}$$

$$-4x - 9 = 3\sqrt{(x + 4)^2 + y^2}$$

Note that this only holds if $x \leq -\frac{9}{4}$. Squaring both sides agains gives,

$$16x^2 + 72x + 81 = 9(x^2 + 8x + 16 + y^2)$$

Expanding and simplifying yields

$$16x^2 + 72x + 81 = 9x^2 + 72x + 144 + 9y^2$$

$$7x^2 - 9y^2 = 63$$

$$\frac{x^2}{9} - \frac{y^2}{7} = 1, \quad x \leq -\frac{9}{4}.$$

4 Let (x, y) be the coordinates of point P . If $AP - BP = 4$, then

$$\sqrt{(x+3)^2 + y^2} - \sqrt{(x-3)^2 + y^2} = 4$$

$$\sqrt{(x+3)^2 + y^2} = 4 + \sqrt{(x-3)^2 + y^2}$$

Squaring both sides gives

$$(x+3)^2 + y^2 = 16 + 8\sqrt{(x-3)^2 + y^2} + (x-3)^2 + y^2$$

Expanding and simplifying

$$x^2 + 6x + 9 + y^2 = 16 + 8\sqrt{(x-3)^2 + y^2} + x^2 - 6x + 9 + y^2$$

$$12x - 16 = 8\sqrt{(x-3)^2 + y^2}$$

$$3x - 4 = 2\sqrt{(x-3)^2 + y^2}$$

Note that this only holds if $x \geq \frac{4}{3}$. Squaring both sides again gives,

$$9x^2 - 24x + 16 = 4(x^2 - 6x + 9 + y^2)$$

Expanding and simplifying yields

$$9x^2 - 24x + 16 = 4x^2 - 24x + 36 + 4y^2$$

$$5x^2 - 4y^2 = 20$$

5 Let (x, y) be the coordinates of point P . If $FP = 2MP$

$$\sqrt{(x-5)^2 + y^2} = 2\sqrt{(x+1)^2}$$

Squaring both sides

$$(x-5)^2 + y^2 = 4(x+1)^2$$

$$x^2 - 10x + 25 + y^2 = 4(x^2 + 2x + 1)$$

$$x^2 - 10x + 25 + y^2 = 4x^2 + 8x + 4$$

$$0 = 3x^2 + 18x - y^2 - 21$$

Completing the square gives,

$$0 = 3(x^2 + 6x) - y^2 - 21$$

$$0 = 3(x^2 + 6x + 9 - 9) - y^2 - 21$$

$$0 = 3((x+3)^2 - 9) - y^2 - 21$$

$$0 = 3(x+3)^2 - y^2 - 48$$

$$\frac{(x+3)^2}{16} - \frac{y^2}{48} = 1.$$

This is a hyperbola with centre $(-3, 0)$

6 Let (x, y) be the coordinates of point P . If $FP = 2MP$

$$\sqrt{x^2 + (y + 1)^2} = 2\sqrt{(y + 4)^2}$$

Squaring both sides

$$x^2 + (y + 1)^2 = 4(y + 4)^2$$

$$x^2 + y^2 + 2y + 1 = 4(y^2 + 8y + 16)$$

$$x^2 + y^2 + 2y + 1 = 4y^2 + 32y + 64$$

$$0 = 3y^2 + 30y - x^2 + 63$$

Completing the square gives,

$$0 = 3(y^2 + 10y) - x^2 + 63$$

$$0 = 3(y^2 + 10y + 25 - 25) - x^2 + 63$$

$$0 = 3((y + 5)^2 - 25) - x^2 + 63$$

$$0 = 3(y + 5)^2 - 75 - x^2 + 63$$

$$0 = 3(y + 5)^2 - x^2 - 12$$

$$\frac{(y + 5)^2}{4} - \frac{x^2}{12} = 1.$$

This is a hyperbola with centre $(0, -5)$